

1. 영상을 보며 9단 곱셈을 외워 봅시다.

※ 열심히 연습했으면 ○ 표하세요.

| 함께하기 | 스스로 하기 | 나의 카드로 구구단 |
|------|--------|------------|
| | | |

2. 덧셈 문제를 풀어보세요. (곱셈을 더 잘하게 해주는 덧셈문제)

$9 + 9 = \square$

$72 + 9 = \square$

$18 + 9 = \square$

$81 + 9 = \square$

$27 + 9 = \square$

$45 + 9 = \square$

$36 + 9 = \square$

$45 + 18 = \square$

$45 + 9 = \square$

$45 + 27 = \square$

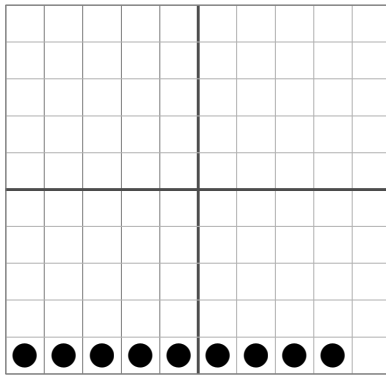
$54 + 9 = \square$

$45 + 36 = \square$

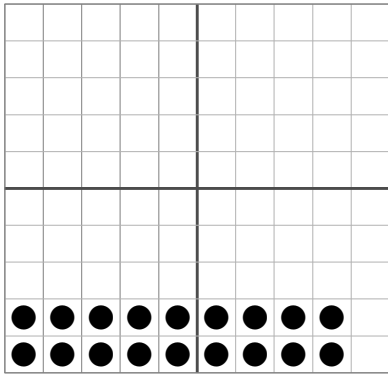
$63 + 9 = \square$

$45 + 45 = \square$

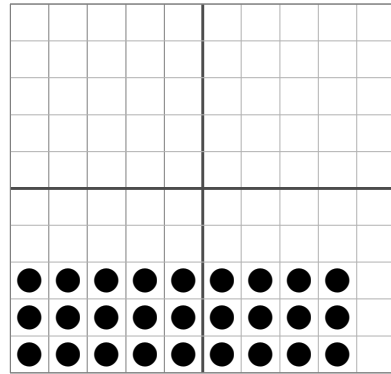
3. 아래와 같이 그림을 보고 곱셈식을 완성하세요.



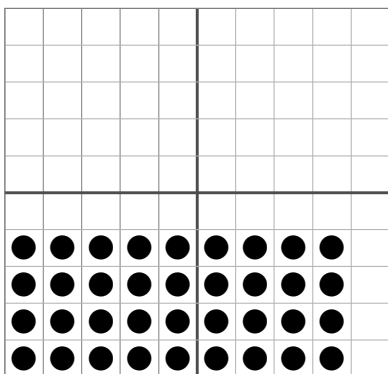
$$\boxed{9} \times \boxed{1} = \boxed{9}$$



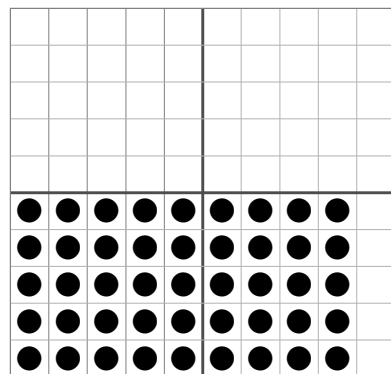
$$\boxed{9} \times \boxed{} = \boxed{}$$



$$\boxed{9} \times \boxed{} = \boxed{}$$

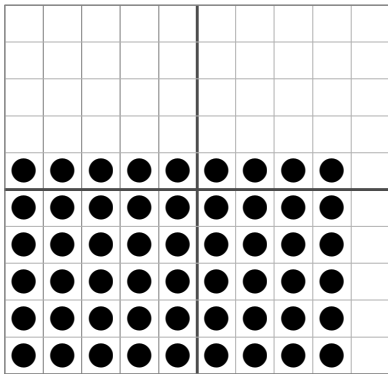


$$\boxed{} \times \boxed{} = \boxed{}$$




$$\boxed{} \times \boxed{} = \boxed{}$$


4. 아래와 같이 그림을 보고 곱셈식을 완성하세요.




$$\boxed{9} \times \boxed{} = \boxed{}$$




$$\boxed{} \times \boxed{} = \boxed{}$$



$$\boxed{} \times \boxed{} = \boxed{}$$



$$\boxed{} \times \boxed{} = \boxed{}$$




$$\boxed{} \times \boxed{} = \boxed{}$$


5. 아래와 같이 그림을 보고 곱셈식을 완성하세요.




$$\boxed{9} \times \boxed{1} = \boxed{9}$$




$$\boxed{9} \times \boxed{} = \boxed{}$$




$$\boxed{9} \times \boxed{} = \boxed{}$$




$$\boxed{} \times \boxed{} = \boxed{}$$




$$\boxed{} \times \boxed{} = \boxed{}$$



$$\boxed{} \times \boxed{} = \boxed{}$$




$$\boxed{} \times \boxed{} = \boxed{}$$



$$\boxed{} \times \boxed{} = \boxed{}$$



$$\boxed{} \times \boxed{} = \boxed{}$$



$$\boxed{} \times \boxed{} = \boxed{}$$

9단 곱셈은 ()씩 커지고 있어요!

6. 9부터 9씩 뛰어선 수에 ○표시 하고, 빈칸에 알맞은 답을 쓰세요.

| | | | | | | | | | |
|----|----|----|----|----|----|----|----|----|----|
| 1 | 2 | 3 | 4 | 5 | 6 | 7 | 8 | 9 | 10 |
| 11 | 12 | 13 | 14 | 15 | 16 | 17 | 18 | 19 | 20 |
| 21 | 22 | 23 | 24 | 25 | 26 | 27 | 28 | 29 | 30 |
| 31 | 32 | 33 | 34 | 35 | 36 | 37 | 38 | 39 | 40 |
| 41 | 42 | 43 | 44 | 45 | 46 | 47 | 48 | 49 | 50 |
| 51 | 52 | 53 | 54 | 55 | 56 | 57 | 58 | 59 | 60 |
| 61 | 62 | 63 | 64 | 65 | 66 | 67 | 68 | 69 | 70 |
| 71 | 72 | 73 | 74 | 75 | 76 | 77 | 78 | 79 | 80 |
| 81 | 82 | 83 | 84 | 85 | 86 | 87 | 88 | 89 | 90 |

| | | | | | |
|-----------------|----------------------|----------------|----------------------|----------------|----------------------|
| $9 \times 1 =$ | <input type="text"/> | $9 \times 2 =$ | <input type="text"/> | $9 \times 3 =$ | <input type="text"/> |
| $9 \times 4 =$ | <input type="text"/> | $9 \times 5 =$ | <input type="text"/> | $9 \times 6 =$ | <input type="text"/> |
| $9 \times 7 =$ | <input type="text"/> | $9 \times 8 =$ | <input type="text"/> | $9 \times 9 =$ | <input type="text"/> |
| $9 \times 10 =$ | <input type="text"/> | | | | |

7. 알맞은 곱셈식과 답을 연결하세요.

- | | | |
|---------------|---|------|
| 9×1 | • | 72 |
| 9×2 | • | 36 |
| 9×3 | • | 27 |
| 9×4 | • | 63 |
| 9×5 | • | 18 |
| 9×6 | • | 90 |
| 9×7 | • | 9 |
| 9×8 | • | 54 |
| 9×9 | • | 81 |
| 9×10 | • | 45 |

8. 뛰어세기를 하며 곱셈을 해보세요.

